



PRATAP PUBLIC SCHOOL, SECTOR-6, KARNAL
HOLIDAY HOMEWORK-2024-25
CLASS: XII
SUBJECT: POLITICAL SCIENCE

Prepare project file on the topics mentioned as per following schedule:-

Cover the negative as well as positive aspects of relationship between India and the following countries. Current updates should be highlighted.

- a) Relationship between India and Russia
- b) Relationship between India and China
- c) Relationship between India and Pakistan d) Relationship between India and Bangladesh

S.no	Roll No.	Topics allotted
1.	1 to 7	Relationship between India and Russia, India and China
2.	8 to 13	Relationship between India and Pakistan, India and Bangladesh
3.	14 to 20	Project on the latest schemes introduced by our Prime Minister and their relevance in India's development.
4.	21 to 25	One Party Dominance-Congress to BJP post 2014 (include 2024 election results)
5.	26 to 31	Change in India's Foreign Policy

While preparing the file following points must be considered:-

i) First page of file of should describe:-

- Title of project
- Identity of the student
- School name
- Name of the teacher concerned.

ii) Acknowledgement

iii) Certificate by the internal examiner

iv) Content must include: -

- Introduction of the topic
- Explanation of topics using schedules/ diagrams.
- Conclusion to be written in points.
- Minimum pages 15- 18

vi) Don't copy the content as given in the book; it should reflect originality and innovation.

vi) Bibliography must be given at the end of the project file.

B. Read and revise the chapters taught in the class and solve the given assignment.

Assignment covers following chapters:

1. End of Bipolarity
2. Alternative Centres of Powers
3. Contemporary South Asia
4. Challenges of Nation Building
5. Era of one party dominance
6. International Organizations
7. Security in the Contemporary World

TYPE 1

1. Which leader opposed the cup which was started by the communist party hardliners in 1991?
(a) Boris Yeltsin (b) Joseph Stalin (c) Vladimir Putin (d) Mikhail Gorbachev
2. Select the correct option for the first three major republics who declared that the Soviet Union was disbanded.
(a) Russia, Belarus, Poland
(b) Russia, Ukraine, Latvia
(c) Russia, Ukraine, Belarus
(d) Russia, Ukraine, Estonia
3. Pick out the correct set of the Baltic Republic:
(a) Estonia, Latvia, Lithuania
(b) Bosnia, Croatia, Slovenia
(c) Yugoslavia, Czech, Slovaks
(d) Kazakhstan, Turkmenistan, Uzbekistan
4. Which among the following was the founding member of the ASEAN?
(a) Laos (b) Cambodia (c) Thailand (d) Myanmar
5. Alternative centres of political and economic power to limit America's dominance emerged in the 1990s after—
(a) Fall of the Soviet Union
(b) Victory of the capitalism
(c) End of the cold war
(d) All of the above
6. The European Union have:
(a) A constitution, flag and anthem
(b) A common language, flag and currency
(c) A flag, anthem, founding date and currency
(d) A founding date, anthem and currency
7. Which one of the following statements about India's relations with Pakistan is incorrect?
(a) India and Pakistan signed the Indus Water treaty which has survived inspite of various military conflicts.

(b) India and Pakistan worked together to restore people back to their families after partition.

(c) India and Pakistan have a Treaty of Friendship to work against terrorism.

(d) India and Pakistan signed the Tashkent agreement in 1966.

8. Identify the country which has all the four features:

(a) It came into existence with India's help.

(b) It is secular and democratic country.

(c) Its border touches the border of India.

(d) It is part of India's Look East Policy.

Choose the correct option

(a) Myanmar

(b) Bhutan

(c) Bangladesh

(d) Nepal

9. A process of exchanging information on defence matters between nations on a regular basis is known as-

(a) Confidence-Building Measures

(b) Arms Control

(c) Alliance

(d) Disarmament

10. 14. How many seats did the Congress win in first General election?

(a) 364 seats

(b) 368 seats

(c) 489 seats

(d) 468 seats

TYPE II

Arrange the given in Chronological order:

11. Arrange them according to their establishment

(i) WTO

(ii) IAEA

(iii) UN Human Rights Council

(iv) IMF

Select the correct option:

(a) (ii), (iii), (iv) and (i)

(b) (iv) (ii), (i) and (iii)

(c) (iv), (i), (ii) and (iii)

(d) (ii), (i), (iii) and (iv)

12. (i) The World Trade Organisation

(ii) Amnesty International

(iii) League of Nations

(iv) World Bank

Select the correct option:

(a) (iii), (iv), (i) and (ii)

(b) (iv), (ii) (ii) and (i)

(c) (ii), (iii), (iv) and (i)

(d) (i), (ii) (iii) and (iv)

13. (i) SAARC

(ii) Indo-Soviet Friendship Treaty

(iii) India sent force in Sri Lanka to maintain peace

(iv) Sheikh Mujibur assassinated

Select the correct option:

- (a) (ii), (iv), (i) and (iii)
- (b) (iv), (ii), (i) and (iii)
- (c) (iv), (i), (ii) and (iii)
- (d) (ii), (i), (iii) and (iv)

14. (1) Establishment of the ASEAN
(ii) Establishment of European Union
(iii) Establishment of ASEAN Regional Forum
(iv) Establishment of Organisation for European Economic Community.

Select the correct option:

- (a) (ii), (i), (ii) and (iv)
- (b) (iv), (i), (ii) and (iii)
- (c) (iii), (i), (ii) and (iv)
- (d) (ii), (iv), (i) and (iii)

15. (i) China adopted open door policy
(ii) Privatisation of agriculture in China
(iii) Rajiv Gandhi visited China
(iv) China joined WTO.

Select the correct option:

- (a) (ii), (i), (iii) and (iv)
- (b) (i), (ii), (iii) and (iv)
- (c) (iv), (i), (ii) and (iii)
- (d) (iii), (i), (ii) and (iv)

16. 1. (1) The Soviet invasion of Afghanistan
(ii) End of civil war in Tajikistan
(iii) A military coup by the Communist Party hardliners
(iv) Russian Revolution

Select the correct option:

- (a) (i), (ii), (ii), (iv)
- (b) (ii), (i), (iii), (iv)
- (c) (iv), (i), (iii), (ii)
- (d) (iv), (ii), (i), (iii)

17. (i) End of the Second World War
(ii) Disintegration of the USSR
(iii) Fall of the Berlin Wall
(iv) Indo-Russian strategic agreement

Select the correct option:

- (a) (iii), (i), (ii) and (iv)
- (b) (1), (ii), (ii) and (iv)
- (c) (ii), (i), (iv) and (iii)
- (d) (ii), (iii), (i) and (iv)

TYPE- III

Assertion-Reason Questions

Directions (Q. Nos. 18-26) In the questions given below, there are two statements marked as Assertion (A) and Reason (R). Read the statements and choose the correct option.

- (a) Both A and R are true and R is the correct explanation of A
- (b) Both A and R are true, but R is not the correct explanation of A
- (c) A is true, but R is false
- (d) A is false, but R is true

18. Assertion (A) The old system of social welfare in the Soviet Union automatically got destroyed.

Reason (R) The withdrawal of government subsidies pushed large sections of the people into poverty.

19. Assertion (A) BRICS does not exist in the form of organisation, but it is an annual summit between the supreme leaders of five nations.

Reason (R) The chairmanship of the forum is rotated annually among the members in accordance with the acronym BRICS.

20. Assertion (A) In 1978, Deng Xiaping announced the 'Open Door' policy and economic reforms in China.

Reason (R) 'Open Door' policy was to generate higher productivity by investments of capital and technology from abroad.

21. Assertion (A) The post Cold War era has not meant the end of conflicts and tensions in the South Asia region.

Reason (R) There are many conflicts on various issues among the South Asian Regions.

22. Assertion (A) The membership of the UN Security Council was expanded from 11 to 15 in 1965.

Reason (R) Number of permanent members of the Security Council was changed.

23. Assertion (A) Traditional security accepts confidence building as a means of avoiding violence.

Reason (R) Confidence building is a process in which countries share ideas and information with their rivals.

24. Assertion (A) Our leaders were conscious of the critical role of politics in any democracy.

Reason (R) They did not see politics as a problem, they saw it as a way of solving problems.

25. Assertion (A) Movement of the people of Hyderabad state against the Nizam's rule had gathered force and momentum.

Reason (R) Peasantry and women joined hands against the oppressive rule of the Nizam.

26. Assertion (A) The Prime Minister announced the formation of a separate Andhra state in December 1952.

Reason (R) Potti Sriramulu, a congress leader went on an indefinite fast that led to his death after 56 days which caused unrest in Andhra region.

TYPE- IV

Match List-I with List-II and choose the correct option:

27. **List I**

- (A) SA Dange
- (B) Shyama Prasad Mukherjee
- (C) Minoo Masani
- (D) Ashok Mehta

Codes

A	B	C	D	
(a)	3	1	4	2
(b)	3	2	4	1
(c)	2	3	1	4
(d)	4	1	2	3

List II

- (1) Bharatiya Jana Sangh
- (2) Swatantra Party
- (3) Praja Socialist Party
- (4) Communist Party of India

28. **List I**

- A. Standstill Agreement
- B. Maharaja of Manipur Signed Merger Agreement
- C State Reorganisation Act Passed
- D. Major Reorganisation of States in North-East

Codes

A	B	C	D	
(a)	3	1	4	2
(b)	3	2	4	1
(c)	2	3	1	4
(d)	4	1	3	2

List II

- 1. 1949
- 2 1972
- 3. 1947
- 4. 1956

29. List-I

- (A) First SAARC Summit
- (B) Multiple Party system in Maldives
- (C) Implementation of New Constitution in Nepal
- (D) Liberation of Bangladesh

List-II

- (i) 2005
- (ii) December 1971
- (iii) 1985
- (iv) September 2015

- (a) (A) (iii), (B) (i), (C) (iv), (D) (ii)
- (b) (A) (ii), (B) (iv), (C) (i), (D) (iii)
- (c) (A) (i), (B) (iv), (C) (ii), (D) (iii)
- (c) (A) (ii), (B) (iv), (C) (iii), (D) (i)

TYPE- V

Expand the given terms:


- 30. CPSU
- 31. USSR
- 32. CIS
- 33. OEEC
- 34. EEC
- 35. NATO
- 36. ASEAN
- 37. ARF
- 38. FTA

- 39. BRICS
- 40. SAARC
- 41. SAFTA
- 42. IMF
- 43. WTO
- 44. IAEA
- 45. BWC
- 46. CWC
- 47. NPT
- 48. START

TYPE- VI

Study the given cartoons/pictures carefully and answer the questions that follow:

49.




"Struggle for Survival" (Published in 1953) captures contemporary impression of the demand for linguistic states

- (i) Who is the leader shown in the above cartoon?
- (ii) what were the demands of these person standing around him?
- (iii) How were the states reorganized?
- (iv) Was India right in adopting that course?

50.



Keshav, The Hindu



akistan Tribune

- (i) Mention the names of the leader shown above?
- (ii) What does it represent what is the Kashmir issue?
- (iii) How you and can help both these countries resolve Kashmir dispute?
- (iv) What mandate has it given regarding the issue when Nehru took this matter to them?

TYPE- VII

Passage Based Objective Type Questions

51. Study the passage given below carefully and answer the questions that follow.

The UN is an imperfect body, but without it the world would be worse off. Given the growing connections and links between societies and issues-what we often call 'interdependence'-it is hard to imagine how more than seven billion people would live together without an organisation such as the U.N. Technology promises to increase planetary interdependence, and therefore, the importance of the UN will only increase. Peoples and governments will have to find ways of supporting and using the UN and other International Organisation in ways that are consistent with their own interests and the interests of the International Community more broadly

- (i) Which of the following are the limitations of the United Nations that make it an imperfect body?
 - (a) US stands as the only superpower after the disintegration of USSR and the UN cannot check the US powers
 - (b) The single largest contributor of UN is the US which Increases the influence of US over the UN.
 - (c) The UN provides an arena in which it is possible to modify US attitudes and policies
 - (d) Both (a) and (b)
- (ii) How would the world would be worse off, if there were no United Nations?

- (a) The UN provides an arena in which it is possible to modify US attitudes and policies.
- (b) The UN represents all the countries from each continent of the world
- (c) The UN provide a space within which arguments against specific US attitudes and policies are heard and compromises and concessions are shaped.
- (d) Both (a) and (c)

(iii) Which one of the following is the example of Planetary interdependence?

- (a) Technology
- (b) Trade
- (c) Globalisation
- (d) International Community Interests

(iv) How can UN work in favour of meeting interests of International Community?

- (a) By providing them equal representation
- (b) Peoples and governments will have to find ways of supporting and using the UN effectively
- (c) By disregarding the aspects provided by the US at the International level
- (d) None of the above

52. Nepal's transition to democracy is not complete. At the moment, Nepal is undergoing a unique moment in its history because it is moving towards the formation of a Constituent Assembly that will write the Constitution for Nepal. Some sections in Nepal still think that a nominal monarchy is necessary for Nepal to retain its link with the past. The Maoist groups have agreed to suspend armed struggle. They want the Constitution to include the radical programmes of social and economic restructuring. All the parties in the SPA may not agree with this programme. The Maoists and some other political groups are also deeply suspicious of the Indian Government and its role in the future of Nepal.

(i) Why it is said that Nepal is undergoing a unique movement in its history?

- (a) As it is moving towards the formation of Constituent Assembly that will write the constitution.
- (b) As it is moving towards uncivilised protests and movement.
- (c) Due to nominal monarchy in Nepal.
- (d) None of the above

(ii) What is the desire of Maoist groups in Nepal?

- (a) They have agreed to suspend armed struggle.
- (b) They want the constitution to include the radical programmes of social and economic restructuring.
- (c) They were deeply suspicious on the intentions of Indian Government
- (d) Both (a) and (b)

(iii) Why were some political parties suspicious in Nepal?

- (a) Political groups were deeply suspicious regarding the role of Indian Government in the future of Nepal.
- (b) Because they were against the democratic set-up.
- (c) Because they were suspicious regarding the social restructuring
- (d) All of the above

(iv) In the above passage, SPA stands for

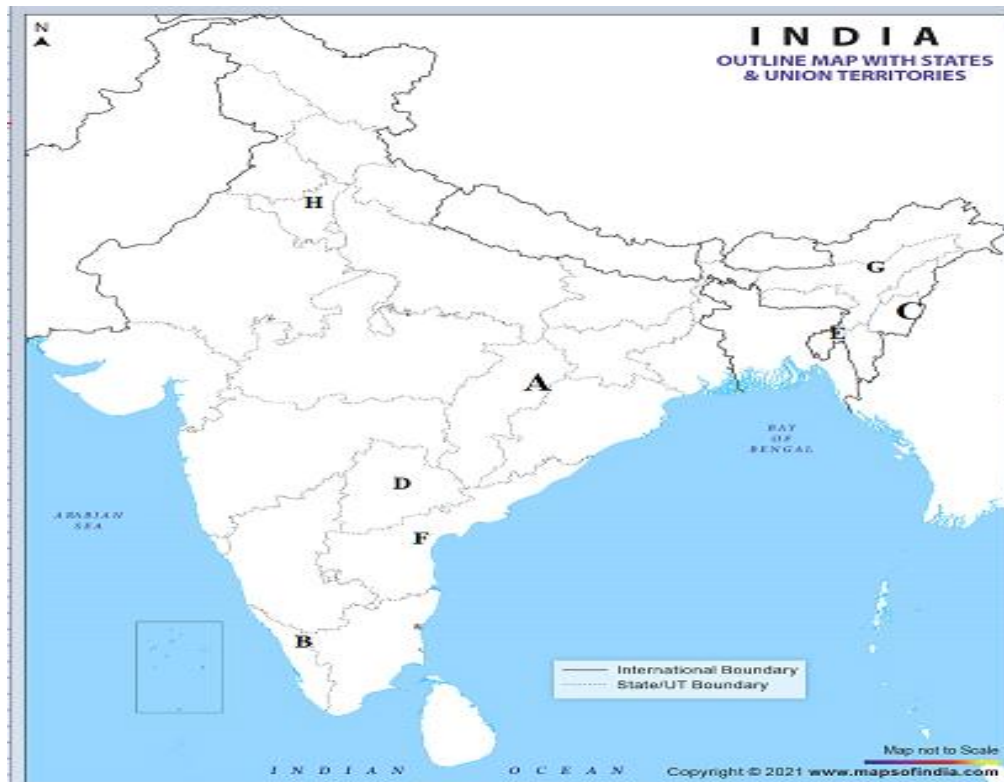
- (a) State Party Alliance
- (b) Seven Party Alliance
- (c) Static Party Alliance
- (d) Six Party Alliance

TYPE- VIII

53. In the political outline map of India, seven states have been marked with alphabets. Identify these states on the basis of information given below and write their correct names in your answer book along with the respective serial number of the information used and the concerned alphabet in the map as per the following format.

S. No. of the information used	Concerned alphabet in the map	Name of the state
1.		
2.		
3.		
4.		
5.		
6.		
7.		

1. The state which was carved out of Madhya Pradesh
2. State which opposed the merger after independence
3. First state of free India having a communist government
4. State to which Nizam belonged to
5. State related to Vishalandhra movement and was the first to get reorganised.
6. State carved out of Punjab in 1966.
7. State adjoining Pakistan territory upto 1971.



SUBJECT: ECONOMICS

Prepare project file on the topics mentioned as per following schedule:-

- 1) Roll No. 1 to 10 [Methods of measuring NNPfc, Environment and sustainable development] (Macro, Indian Economic Development)
- 2) Roll No. 11 to 20 [Concepts of AD & AS, Human capital formation] (Macro, Indian Economic Development)
- 3) Roll No. 20 to 30 [Money and Banking & foreign exchange rate, Comparison between India, Pakistan & China] (Macro, Indian Economic Development)
- 4) Roll No. 30 to 40 [Balance of payment, Employment & Rural Development] (Macro, Indian Economic Development)
- 5) Roll No. 40 onwards [Basic concepts of National Income, Five year plans & New Economic Policy] (Macro, Indian Economic Development)

While preparing the file following points must be considered:-

i) First page (Title page) of file should describe:-

- Title of project
- Identity of the student
- School name
- Name of the teacher concerned.

- Roll no as issued by the C.B.S.E

ii) Acknowledgement

iii) Certificate by the internal examiner

iv) Content must be beautifully hand written and use creativity to present the material in an effective way. (Use tables and diagrams to support the topic discussed)

v) Conclusion must be written in points

vi) 'Bibliography' must be given at the end of the project file.

Note: - Students can prepare file on any general or latest topic related to present economic conditions.

***Please revise the back exercise of each chapter covered up to UT 1 syllabus having:-**

Competency based learning: Objective questions like:-

- **Multiple Choice questions**
- **Fill in the blanks**
- **True-false alternatives**
- **Assertion and reasoning**

Competency based learning: Picture based & Case- based questions.

Competency based learning: Descriptive questions like:-

- **Very short answer questions**
- **HOTS & Applications based questions**
- **Analysis & Evaluation based questions**
- **NCERT questions**

.....

SUBJECT -ENGLISH

1.Revise the syllabus done so far.

2.Watch Ted talks related to efficacious topics and read the articles published in the newspaper weekly to flourish your writing skills.

3.Refer to BBC Sample paper and attempt competency based questions of the lessons covered so far.

PROJECT WORK

A.

TOPIC: A Thematic Analysis of _____.

Poems: (choose any one)

1. My Mother at Sixty-Six

2. Keeping Quiet

Organization of project:

First Page:

<p>ENGLISH CORE – 301</p> <p>PROJECT ON</p> <p>THEMATIC ANALYSIS OF: <i>NAME OF POEM</i></p> <p>BY: <i>NAME OF POET</i></p> <p>SUBMITTED TO: <i>NAME OF YOUR ENGLISH TEACHER</i></p> <p>SUBMITTED BY: <i>YOUR NAME</i></p> <p>SIGNATURE : <i>YOUR SIGN</i></p> <p>CLASS & SECTION: _____</p> <p>ROLL #: _____</p>

Second Page : Acknowledgement

Third Page : Certificate by the internal examiner

It must include

Text

- Title: Thematic Analysis –
- Themes analyzed
 - 1.Theme 1
 - 2.Theme 2
- Your opinion
- Conclusion

Paste pictures related to the theme

Maintain originality

B. The author Tishani Doshi in ‘Journey to the End of the Earth’ presents a picture of Antarctica from a different perspective.

It is indeed the place to go to understand the earth's past, present and future. On the basis of the reading of 'The Ailing Planet' & 'Journey to the End of the Earth' prepare a **PPT** highlighting the significance of the continent also, reflect how man's unwarranted encroachment has proved to be catastrophic.

Watch Geography and Discovery channels and gather information to make it interesting.

SUBJECT : MATHEMATICE

1. Prepare fair register for first four chapters from NCERT.
 2. Prepare practical work.
 - * Six pages, one for every graph of trigonometrical functions.
 - * Six pages, one for every graph of inverse trigonometrical functions
 - * Write table for their domain and range.
-

SUBJECT : GEOGRAPHY

Prepare a Practical File on "PROCESSING OF DATA" as a part of your XII-Geography syllabus as per the following guidelines:-

Highlight the following:-

1. Definition of data.
2. Type and sources of data.
 - 2.1 Primary sources
 - 2.2 Secondary sources
 - 2.3 Other sources.
3. Tabulating and processing of data.
4. Definitions of Mean, Median and Mode.
5. Merits and demerits of Mean, Median and Mode.
6. Direct and indirect methods of calculating Mean, Median and Mode.
7. Calculations of averages, measures of central tendencies, deviation and rank correlation.
8. General Instructions:-

- I. The project should be hand written.
 - II. It should be well presented, researched, and pictorial.
 - III. Cover page, table of contents, acknowledgements, bibliography, headings and sub – headings are a must.
 - IV. The project should be presented in a file.
 - V. Use/draw pictures, graphs, figures and images wherever required.
 - VI. The practical file should not exceed 35 pages
-

SUBJECT : PAINTING

- 1- Make five sheets of still life on half imperial sheets.
 - 2- Make five sheets of landscape on half imperial sheets.
-

SUBJECT : PSYCHOLOGY

Read chapters 3 & 4 thoroughly.

Read the disorder ' Obsessive Compulsive Disorder'.

Complete all the 4 practicals in file.

The students are supposed to attend Fortis School mental health program in summer break. Kindly register yourself in May..

After the completion of the program you will get a certificate which is to be submitted after the break.

SUBJECT : PHYSICAL EDUCATION

1. Revise unit 4 and 5
 2. Prepare practical file
-

SUBJECT : MUSIC

Make practical file Syllabus

1.Raag-Malkounsh,

bhairav,bhageshwari parichay and notations

2.taal-Rupak,Jhaptaal,

Dhamar Notations and Parichay

3.JeevanParichay-Ustad faiyaz khan, Ustad bade gulam Ali khan,krishan Rao shankar pandit

4.draw structure of tanpura and introduction of tanpura

विषय- हिंदी

प्रश्न 1 निम्नलिखित चित्रों को कवियों के नाम के साथ सुमेलित कीजिए।


	धर्मवीर भारती
	जैनेंद्र कुमार
	हरिवंश राय बच्चन
	आलोक धन्वा
	रघुवीर सहाय



	मनोहर श्याम जोशी
	आनंद यादव
	कुंवर नारायण

प्रश्न 2. सही जोड़ी मिलान कीजिए -

अ	ब
(i) हिन्दी भाषा की लिपि	(क) स्तम्भ लेखन
(ii) समाचार लेखन के	(ख) माधुर्य, ओज व प्रसाद
(iii) 'अतीत के पाँव'	(ग) देव नागरी
(iv) 'पहलवान की ढोलक'	(घ) फणीश्वर नाथ रेणु
(v) शब्द गुण	(च) 'आत्म परिचय'
(vi) हरिवंश राय बच्चन	(ड) छः ककार

प्रश्न 3. पाठ्य पुस्तक आरोह भाग- 2 में संकलित साहित्य के आधार पर निम्नलिखित चित्रों पर 40 से 50 शब्दों में अपने विचार लिखें।

	
---	--

प्रश्न 4. निम्नलिखित प्रश्नों के उत्तर एक वाक्य में लिखिए -

- i. कवि ने पंथी की तुलना किससे की है ?
- ii. जब किसी पद में उपमान का उपमेय में अंगों सहित आरोप किया जाता है, तो कौन सा अलंकार होता है ?
- iii. बाजार दर्शन पाठ के लेखक कौन है ?
- iv. भक्तिन के पिता का नाम क्या था ?
- v. मुहावरा 'पेट पूजा करना का क्या अर्थ है ?
- vi. आनंद यादव की कक्षा के मॉनिटर का क्या नाम था ?
- vii. अपने प्रदेश के कोई दो लोकप्रिय हिन्दी समाचार पत्रों के नाम लिखिए।

प्रश्न 5. खंड 1 को खंड 2 से सुमेलित कीजिए।

खंड 1	खंड 2
(i) रूबाइयाँ	क) प्रश्नवाचक वाक्य
(ii) क्रोध	ख) वीर रस
(iii) खदीदने की शक्ति	(ग) नाटक
(iv) वह कहाँ गया?	(घ) फिराक गोरखपुरी
(v) सात सौ कुएँ	(ङ) पर्चेजिंग पावर
(vi) अभिनेता	(च) रौद्र रस
	(छ) सिंधु घाटी सभ्यता
	(ज) आज्ञावाचक वाक्य

प्रश्न 6. निम्नलिखित प्रश्नों के उत्तर अपने ज्ञान के आधार पर दीजिए ।

1 सिल्वर वेडिंग कहानी की मूल संवेदना आप किस मानेंगे--

- पाश्चात्य संस्कृति का प्रभाव
- हाशिए पर धकेले जाते मानवीय मूल्य पीढ़ी अंतराल
- सिल्वर वेडिंग के परिणाम

2 सिल्वर वेडिंग पाठ में 'जो हुआ होगा' वाक्य का अर्थ है-

- पाश्चात्य विचारधारा के संदर्भ में
- परिवार की संरचना के संदर्भ में
- कृष्ण दा की मृत्यु के संदर्भ में
- यशोधर बाबू की नियुक्ति के संदर्भ में

3 दादा कोल्हू जल्दी क्यों लगाना चाहते थे?

- काम जल्दी समाप्त करने के लिए दूसरी फसल के लिए
- गुड़ की ज्यादा कीमत के लिए
- खेत में पानी देने के लिए

4 'जूझ' उपन्यास मूलतः किस भाषा में लिखा गया है?

- हिंदी
- अंग्रेजी
- मराठी
- गुजराती

5 लेखक आनंद यादव की माँ के अनुसार पढ़ाई की बात करने पर लेखक का पिता कैसे गुर्गता है ?

- कुत्ते के समान
- शेर के समान
- जंगली सूअर के समान
- चीते के समान

6 'जूझ' कहानी लेखक की किस प्रवृत्ति को उद्घाटित करती है?

- कविता करने की प्रवृत्ति
- पढ़ने की प्रवृत्ति
- लेखन की प्रवृत्ति
- संघर्ष की प्रवृत्ति

7 किशन दा के रिटायर होने पर यशोधर बाबू उनकी सहायता क्यों नहीं कर पाए थे?

- यशोधर बाबू की पत्नी किशनदा से नाराज थी।
- यशोधर बाबू का अपना परिवार था, जिसे वे नाराज़ नहीं करना चाहते थे।
- यशोधर बाबू के घर में किशनदा के लिए स्थान का अभाव था।
- किशनदा को यशोधर बाबू ने अपने घर में स्थान देना चाहा था, जिसे किशनदा ने स्वीकार नहीं किया।

8 कहानी का शीर्षक जूझ का अर्थ है-

- (क) मेहनत
- (ख) कठिनाई
- (ग) चालाकी
- (घ) संघर्ष

9 संवाददाताओं के बीच काम का विभाजन कहलाता है

- (क) लाईव
- (ख) बीट
- (ग) बाईट
- (घ) रिपोर्टिंग

10 लेखक मास्टर सौदलगेकर की कविताएँ कब गाता था ?

क- खेत पर पानी लगाते हुए

- ख- ढोर चराते हुए
- ग- कक्षा में
- घ- घर में

11 जूझ उपन्यास का हिंदी अनुवाद किसने किया है ?

- क- केशवदास
- ख- केशव प्रथम वीर
- ग- धरमवीर
- घ- प्रेमचंद

12 कविता के पंख लगा उड़ने से क्या तात्पर्य है ?

- क- उड़ना
- ख- कल्पना करना
- ग- चलना
- घ- इनमे से कोई नहीं

13 कविता और चिड़िया में किस गुण की समानता है ?

- क- दोनों के पंख हैं।
- ख- दोनों ही उड़ान भर सकते हैं।
- ग- दोनों ही चल सकते हैं।
- घ- इनमे से कोई नहीं।

14 वह शब्द जो क्षेत्र विशेष में बोले जाते हैं, वे कहलाते हैं-

- (क) देशज शब्द
- (ख) तकनीकी शब्द
- (ग) क्षेत्रीय शब्द
- (घ) यौगिक शब्द

15 "छोटा मेरा खेत" कविता का हिन्दी में रूपांतरण किया है -

- (क) भोला भाई पटेल
- (ख) उमाशंकर जोशी
- (ग) आलोक धन्वा

(घ) केशूभाई पटेल

16 कवित्त के प्रत्येक चरण में वर्ण होते हैं -

(क) 31

(ख) 33

(ग) 36

(घ) 28

17 बाणभट्ट की आत्मकथा उपन्यास के लेखक हैं

(क) हजारी प्रसाद द्विवेदी

(ख) प्रेमचंद

(ग) यशपाल

(घ) महावीर प्रसाद द्विवेदी

18 दावानल' शब्द किस वाक्यांश के लिए प्रयुक्त होगा?

(क) पेट में लगने वाली आग

(ख) शरीर में लगने वाली आग

(ग) समुद्र में लगने वाली आग

(घ) जंगल में लगने वाली आग

19 'प्रतिलिपि' शब्द किस वाक्यांश के लिए प्रयुक्त होगा?

(क) हाथ से लिखा हुआ

(ख) लेख की नकल

(ग) शरण में आया हुआ

(घ) जिसका कोई आधार न हो

20 कविता की उड़ान किसके बहाने हैं?

- फूलों के।
- बच्चों के।
- चिड़िया के।
- तीनों गलत हैं।

प्रश्न 7. खण्ड-I को खण्ड-II से सुमेलित कीजिए।

खण्ड -I	खण्ड -II
(A) साधन	I कर्ण
(B) कान	II करण
(C) काम	III क्रम
(D) सिलसिला	IV कर्म

नीचे दिए गए विकल्पों में से सही उत्तर होगा:-

- (a) A-I, B-II, C-III, D-IV
- (b) A-II, B-I, C-IV, D-III
- (c) A-II, B-I, C-III, D-IV
- (d) A-I, B-II, C-IV, D-III

प्रश्न 8. नीचे दिए गए प्रश्नों के उत्तर के लिए सही विकल्प पर का निशान लगाएं।

1 समाचार पत्रों या पत्र- पत्रिकाओं में समाचार या रिपोर्ट प्रकाशन हेतु जो समय सीमा निर्धारित की जाती है उसे क्या कहते हैं?

- एंकर बाइट
- एंकर पैकेज
- ब्रेकिंग न्यूज़
- डेडलाइन

2 जब कोई विशेष समाचार सबसे पहले दर्शकों तक पहुंचाया जाता है तो उसे क्या कहते हैं?

- (i) विशेष समाचार
- (ii) ब्रेकिंग न्यूज़
- (iii) उड़ती खबर
- (iv) इनमें से कोई नहीं

3 घटना के दृश्यों के आधार पर लिखी खबर जो एंकर पढ़ता है उसे कहते हैं:-

- (i) फोन इन
- (ii) एंकर बाइट
- (iii) एंकर विजुअल
- (iv) लाइव

4 भारत की प्रमुख वेबसाइट कौन सी है?

- (i) रीडिफ़ डॉट कॉम
- (ii) इंडिया इंफोलाइन
- (iii) सीढ़ी
- (iv) उपर्युक्त सभी

5 जो मीडिया स्थापित व्यवस्था के विकल्प को सामने लाने और उसके अनुकूल सोच को अभिव्यक्त करते हैं उसे क्या कहते हैं?

- (i) वॉचडॉग पत्रकारिता
- (ii) एडवोकेसी पत्रकारिता
- (iii) वैकल्पिक पत्रकारिता
- (iv) खोज परक पत्रकारिता

प्रश्न 9. रिक्त स्थान में उचित शब्द चुनकर लिखिए।

- (i) कविता का खेलना भला _____ क्या जाने! (फूल / कवि)
- (ii) जोर जबरदस्ती से बात की _____ मर गई। (चूड़ी/ अंगूठी)
- (iii) रेखाचित्र को अंग्रेजी में _____ कहा जाता है। (स्केच / ड्राइंग)
- (iv) आनन्दा की पाठशाला _____ से लगती थी। (दस बजे / ग्यारह बजे)
- (v) रघुवीर सहाय की कविता "कैमरे में बंद अपाहिज उनके _____ है। (सीढ़ियों पर धूप में, लोग भूल गए है, आत्महत्या के विरुद्ध) काव्य संग्रह की
- (vi) "लक्ष्मण मूर्छा और राम का विलाप " _____ (ब्रज, संस्कृत, अवधी) भाषा की रचना है।
- (vii) यदि आप सो जायें तो आपको आराम मिलेगा _____ (सरल, संयुक्त, मिश्रित)
- (viii) यशोधर बाबू मूलतः _____ के रहने वाले थे। (कुमाऊँ, आगरा, मेरठ)
- (ix) समाचार लेखन की शैली _____ होती है। (सीधा पिरामिड, उल्टा पिरामिड, तिरछा पिरामिड)
- (x) 'काले मेघा पानी दे' पाठ में _____ महीने का वर्णन किया गया है। (आषाढ़, आश्विन)

प्रश्न 10. निम्नलिखित कथनों के समक्ष सत्य या असत्य लिखिए।

- (i) "पतंग कविता में बाल सुलभ इच्छाओं एवं उमंगों का सुंदर चित्रण किया गया है।
- (ii) कनुप्रिया धर्मवीर भारती का कविता संग्रह है।
- (iii) मैं गरम गाय का दूध पीना चाहता हूँ ।
- (iv) पर्चेजिंग पावर के गर्व में मनुष्य बाजार को विनाशक शक्ति देता है।
- (v) रेडियों और टी.वी. की भाषा में कठिन शब्दों की बहुलता होती है।

प्रश्न 11. दीर्घ उत्तरात्मक प्रश्न

1 गद्य अथवा पद्य अध्ययन के समय आपको कौन-कौन से कारक ध्यान में रखना चाहिए ताकि आपका विश्लेषण प्रभावशाली उत्कृष्ट और सुसंगत हो?

2 किस प्रकार के भाषायी और व्याकरणिक त्रुटियों को ध्यान में रखकर आपको अपनी रचना का संपादन करना चाहिए?

3 नाटक अध्ययन के दौरान, किस प्रकार के नाटकीय तत्व और मनोरंजन के आयाम आपका विश्लेषण को मजबूत करते हैं?

10th International Humanity Olympiad 2024

Details to participate:-----

□ Website- <https://www.humanityolympiad.org>

Click ATTEMPT NOW

Enter the details and fill School Olympiad Code - KARN156

□ 15 mins MCQs based online test-25 MCQs

□ Interesting Questionnaire - Based on humanity, morality and ethics.

□ 10 attempts allowed per day

□ Instant e-certificate

□ Free of cost

□ Exciting rewards and prizes

□ Multiple attempts

□ Share e-certificate with your Class teacher.

Participation is compulsory for all the students